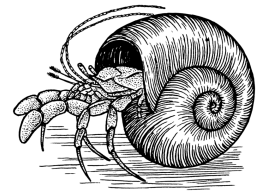


Name _____ Datum _____ Klasse _____



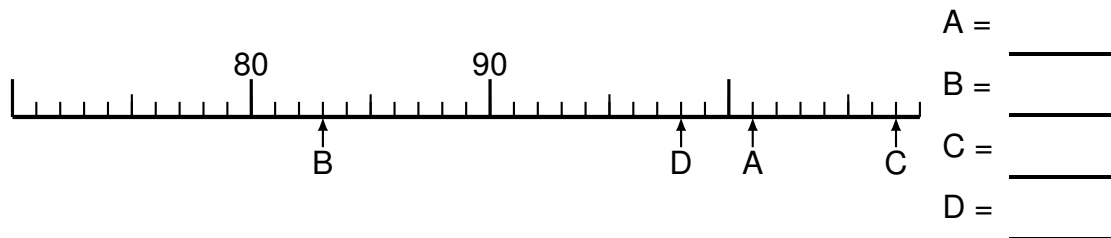
© <http://aufgaben.schulkreis.de>

Zahlenstrahl-Übungen, Blatt 3

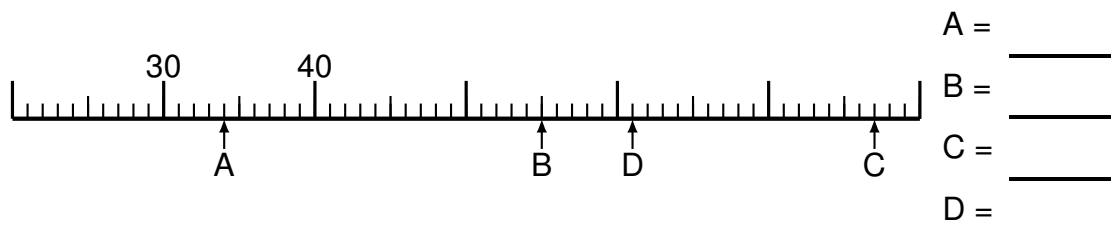
Bereich: bis 100

Bestimme jeweils die Werte A bis D.

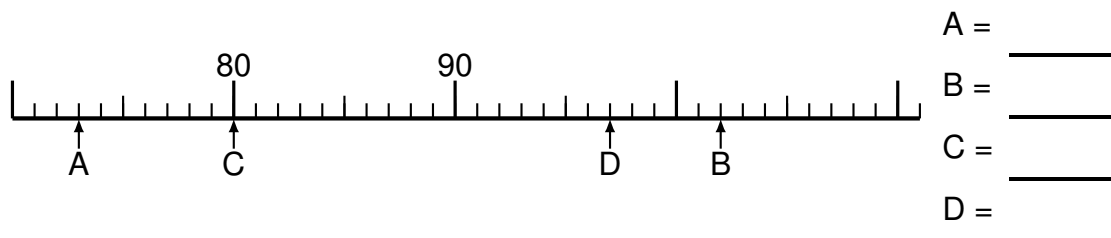
Aufgabe 1

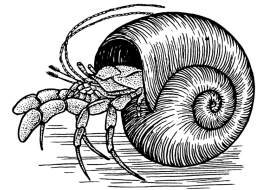


Aufgabe 2

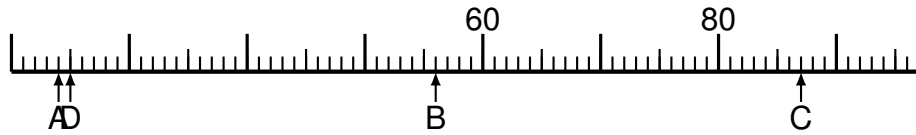


Aufgabe 3



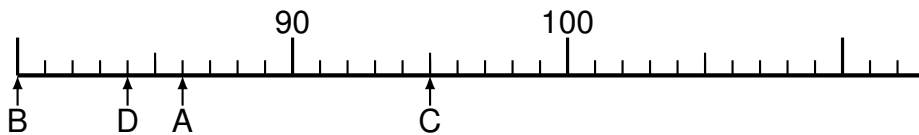


Aufgabe 4



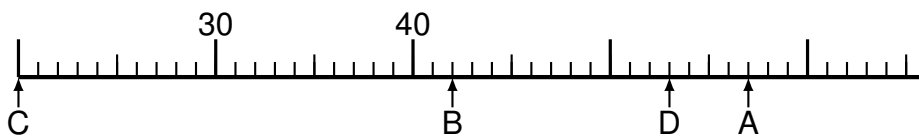
A = _____
B = _____
C = _____
D = _____

Aufgabe 5

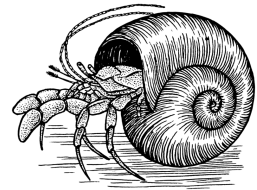


A = _____
B = _____
C = _____
D = _____

Aufgabe 6



A = _____
B = _____
C = _____
D = _____



Lösung: Zahlenstrahl-Übungen, Blatt 3

Bereich: bis 100

Musterlösung:

Aufgabe 1

$$\begin{array}{r} A = \quad 101 \\ \hline B = \quad 83 \\ \hline C = \quad 107 \\ \hline D = \quad 98 \\ \hline \end{array}$$

Aufgabe 4

$$\begin{array}{r} A = \quad 24 \\ \hline B = \quad 56 \\ \hline C = \quad 87 \\ \hline D = \quad 25 \\ \hline \end{array}$$

Aufgabe 2

$$\begin{array}{r} A = \quad 34 \\ \hline B = \quad 55 \\ \hline C = \quad 77 \\ \hline D = \quad 61 \\ \hline \end{array}$$

Aufgabe 5

$$\begin{array}{r} A = \quad 86 \\ \hline B = \quad 80 \\ \hline C = \quad 95 \\ \hline D = \quad 84 \\ \hline \end{array}$$

Aufgabe 3

$$\begin{array}{r} A = \quad 73 \\ \hline B = \quad 102 \\ \hline C = \quad 80 \\ \hline D = \quad 97 \\ \hline \end{array}$$

Aufgabe 6

$$\begin{array}{r} A = \quad 57 \\ \hline B = \quad 42 \\ \hline C = \quad 20 \\ \hline D = \quad 53 \\ \hline \end{array}$$