


Name _____ Datum _____ Klasse _____



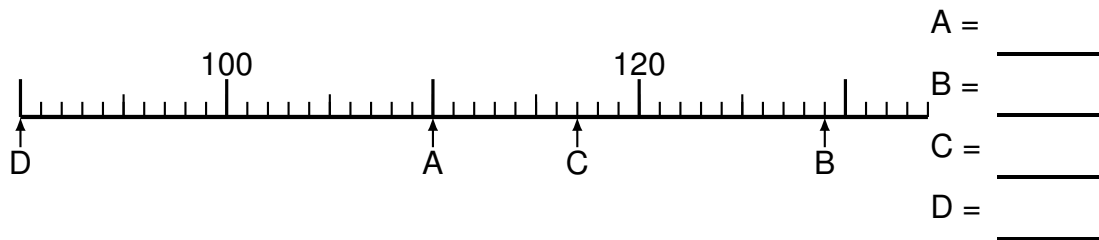
© <http://aufgaben.schulkreis.de>

Zahlenstrahl-Übungen, Blatt 4

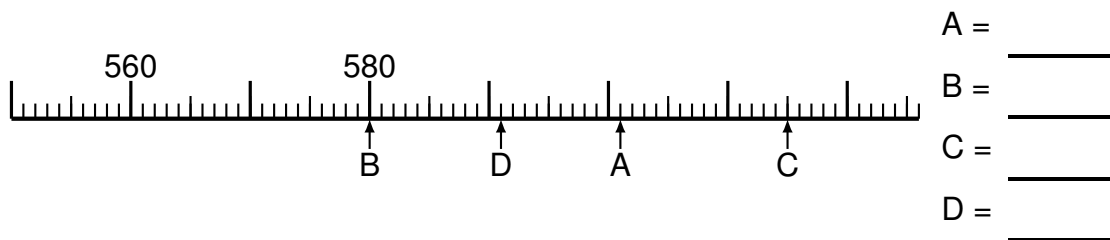
Bereich: bis 1000

Bestimme jeweils die Werte A bis D.

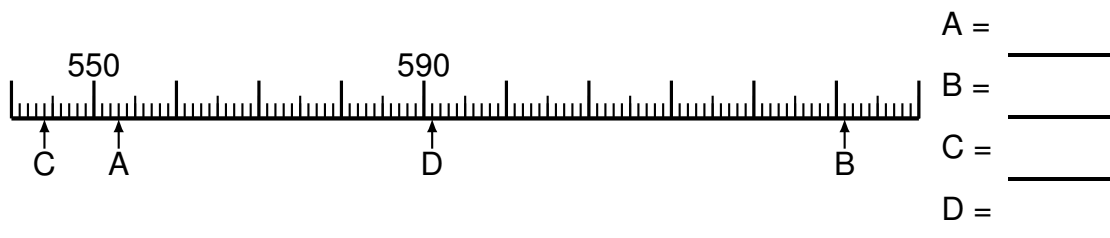
Aufgabe 1




Aufgabe 2

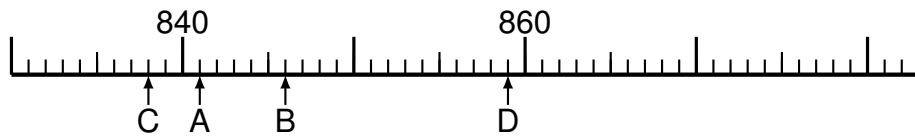


Aufgabe 3



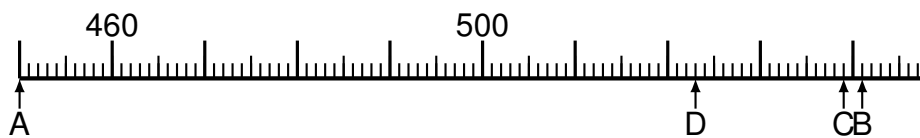


Aufgabe 4



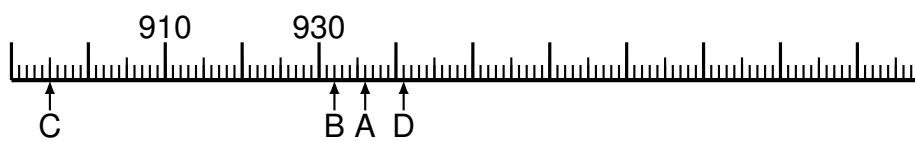
A = _____
B = _____
C = _____
D = _____

Aufgabe 5




A = _____
B = _____
C = _____
D = _____

Aufgabe 6



A = _____
B = _____
C = _____
D = _____



Lösung: Zahlenstrahl-Übungen, Blatt 4

Bereich: bis 1000

Musterlösung:

Aufgabe 1

$$\begin{array}{r} A = \quad 110 \\ \hline B = \quad 129 \\ \hline C = \quad 117 \\ \hline D = \quad 90 \\ \hline \end{array}$$

Aufgabe 4

$$\begin{array}{r} A = \quad 841 \\ \hline B = \quad 846 \\ \hline C = \quad 838 \\ \hline D = \quad 859 \\ \hline \end{array}$$

Aufgabe 2

$$\begin{array}{r} A = \quad 601 \\ \hline B = \quad 580 \\ \hline C = \quad 615 \\ \hline D = \quad 591 \\ \hline \end{array}$$

Aufgabe 5

$$\begin{array}{r} A = \quad 450 \\ \hline B = \quad 541 \\ \hline C = \quad 539 \\ \hline D = \quad 523 \\ \hline \end{array}$$

Aufgabe 3

$$\begin{array}{r} A = \quad 553 \\ \hline B = \quad 641 \\ \hline C = \quad 544 \\ \hline D = \quad 591 \\ \hline \end{array}$$

Aufgabe 6

$$\begin{array}{r} A = \quad 936 \\ \hline B = \quad 932 \\ \hline C = \quad 895 \\ \hline D = \quad 941 \\ \hline \end{array}$$