

Name _____ Datum _____ Klasse _____




© <http://aufgaben.schulkreis.de>

Uhrzeit, Blatt 9


Genauigkeit: 1 Min.


Bestimme die Uhrzeiten.





5:08 Uhr


17:08 Uhr






















Lösung: Uhrzeit, Blatt 9

Genauigkeit: 1 Min.

Musterlösung:

5:08 Uhr / 17:08 Uhr

11:46 Uhr / 23:46 Uhr

9:02 Uhr / 21:02 Uhr

10:47 Uhr / 22:47 Uhr

1:34 Uhr / 13:34 Uhr

7:41 Uhr / 19:41 Uhr

9:57 Uhr / 21:57 Uhr

3:10 Uhr / 15:10 Uhr

8:25 Uhr / 20:25 Uhr