

Name \_\_\_\_\_ Datum \_\_\_\_\_ Klasse \_\_\_\_\_




© <http://aufgaben.schulkreis.de>

# Uhrzeit, Blatt 8









Genauigkeit: 1 Min.

Bestimme die Uhrzeiten.



3:37 Uhr

15:37 Uhr



© <http://aufgaben.schulkreis.de>



# Lösung: Uhrzeit, Blatt 8

Genauigkeit: 1 Min.

Musterlösung:

3:37 Uhr / 15:37 Uhr

4:45 Uhr / 16:45 Uhr

1:42 Uhr / 13:42 Uhr

3:45 Uhr / 15:45 Uhr

0:57 Uhr / 12:57 Uhr

3:05 Uhr / 15:05 Uhr

4:30 Uhr / 16:30 Uhr

4:53 Uhr / 16:53 Uhr

1:31 Uhr / 13:31 Uhr