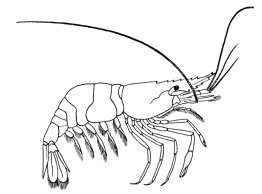


Name _____ Datum _____ Klasse _____




© <http://aufgaben.schulkreis.de>

Uhrzeit, Blatt 7









Genauigkeit: 1 Min.

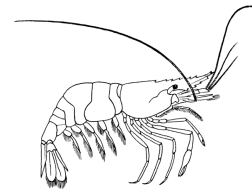
Bestimme die Uhrzeiten.



2:16 Uhr

14:16 Uhr





Lösung: Uhrzeit, Blatt 7

Genauigkeit: 1 Min.

Musterlösung:

2:16 Uhr / 14:16 Uhr

6:35 Uhr / 18:35 Uhr

1:31 Uhr / 13:31 Uhr

0:24 Uhr / 12:24 Uhr

4:37 Uhr / 16:37 Uhr

1:05 Uhr / 13:05 Uhr

0:05 Uhr / 12:05 Uhr

8:51 Uhr / 20:51 Uhr

6:14 Uhr / 18:14 Uhr