


Name _____ Datum _____ Klasse _____




© <http://aufgaben.schulkreis.de>

Uhrzeit, Blatt 4


Genauigkeit: 1 Min.


Bestimme die Uhrzeiten.





10:08 Uhr


22:08 Uhr























Lösung: Uhrzeit, Blatt 4

Genauigkeit: 1 Min.

Musterlösung:

10:08 Uhr / 22:08 Uhr

4:54 Uhr / 16:54 Uhr

9:20 Uhr / 21:20 Uhr

10:26 Uhr / 22:26 Uhr

5:54 Uhr / 17:54 Uhr

7:35 Uhr / 19:35 Uhr

6:59 Uhr / 18:59 Uhr

5:14 Uhr / 17:14 Uhr

1:09 Uhr / 13:09 Uhr