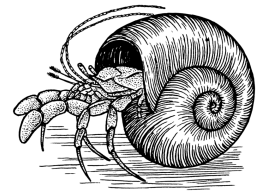


Name _____ Datum _____ Klasse _____




© <http://aufgaben.schulkreis.de>

Uhrzeit, Blatt 3



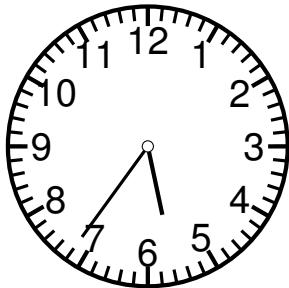





Genauigkeit: 1 Min.

Bestimme die Uhrzeiten.

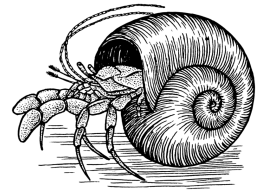


4:50 Uhr

16:50 Uhr



© <http://aufgaben.schulkreis.de>



Lösung: Uhrzeit, Blatt 3

Genauigkeit: 1 Min.

Musterlösung:

4:50 Uhr / 16:50 Uhr

7:05 Uhr / 19:05 Uhr

8:45 Uhr / 20:45 Uhr

0:40 Uhr / 12:40 Uhr

8:34 Uhr / 20:34 Uhr

10:31 Uhr / 22:31 Uhr

5:36 Uhr / 17:36 Uhr

7:49 Uhr / 19:49 Uhr

1:22 Uhr / 13:22 Uhr