


Name \_\_\_\_\_ Datum \_\_\_\_\_ Klasse \_\_\_\_\_

© <http://aufgaben.schulkreis.de>

# Uhrzeit, Blatt 10


Genauigkeit: 1 Min.

Bestimme die Uhrzeiten.




10:59 Uhr

22:59 Uhr




\_\_\_\_\_

\_\_\_\_\_




\_\_\_\_\_

\_\_\_\_\_




\_\_\_\_\_

\_\_\_\_\_




\_\_\_\_\_

\_\_\_\_\_




\_\_\_\_\_

\_\_\_\_\_




\_\_\_\_\_

\_\_\_\_\_




\_\_\_\_\_

\_\_\_\_\_



\_\_\_\_\_

\_\_\_\_\_



# Lösung: Uhrzeit, Blatt 10

Genauigkeit: 1 Min.

Musterlösung:

10:59 Uhr / 22:59 Uhr

2:55 Uhr / 14:55 Uhr

11:27 Uhr / 23:27 Uhr

0:17 Uhr / 12:17 Uhr

11:23 Uhr / 23:23 Uhr

2:04 Uhr / 14:04 Uhr

11:36 Uhr / 23:36 Uhr

2:52 Uhr / 14:52 Uhr

4:58 Uhr / 16:58 Uhr