


Name \_\_\_\_\_ Datum \_\_\_\_\_ Klasse \_\_\_\_\_

© <http://aufgaben.schulkreis.de>

# Uhrzeit, Blatt 1


Genauigkeit: 1 Min.

Bestimme die Uhrzeiten.




2:03 Uhr

14:03 Uhr




\_\_\_\_\_

\_\_\_\_\_




\_\_\_\_\_

\_\_\_\_\_




\_\_\_\_\_

\_\_\_\_\_




\_\_\_\_\_

\_\_\_\_\_



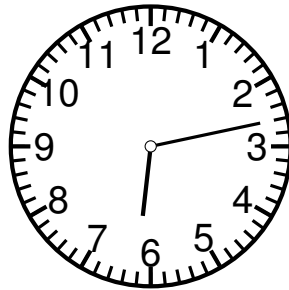
\_\_\_\_\_

\_\_\_\_\_




\_\_\_\_\_

\_\_\_\_\_




\_\_\_\_\_

\_\_\_\_\_



\_\_\_\_\_

\_\_\_\_\_



# Lösung: Uhrzeit, Blatt 1

Genauigkeit: 1 Min.

Musterlösung:

2:03 Uhr / 14:03 Uhr

6:01 Uhr / 18:01 Uhr

7:13 Uhr / 19:13 Uhr

8:00 Uhr / 20:00 Uhr

8:53 Uhr / 20:53 Uhr

1:57 Uhr / 13:57 Uhr

11:57 Uhr / 23:57 Uhr

6:13 Uhr / 18:13 Uhr

9:51 Uhr / 21:51 Uhr