

Name _____ Datum _____ Klasse _____




© <http://aufgaben.schulkreis.de>

Uhrzeit, Blatt 8









Genauigkeit: 15 Min.

Bestimme die Uhrzeiten.



8:15 Uhr

20:15 Uhr





Lösung: Uhrzeit, Blatt 8

Genauigkeit: 15 Min.

Musterlösung:

8:15 Uhr / 20:15 Uhr

2:00 Uhr / 14:00 Uhr

5:15 Uhr / 17:15 Uhr

1:30 Uhr / 13:30 Uhr

3:00 Uhr / 15:00 Uhr

10:45 Uhr / 22:45 Uhr

1:30 Uhr / 13:30 Uhr

3:45 Uhr / 15:45 Uhr

7:15 Uhr / 19:15 Uhr