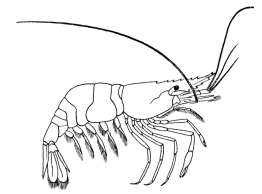


Name _____ Datum _____ Klasse _____




© <http://aufgaben.schulkreis.de>

Uhrzeit, Blatt 7









Genauigkeit: 15 Min.

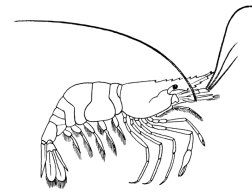
Bestimme die Uhrzeiten.



9:15 Uhr

21:15 Uhr





Lösung: Uhrzeit, Blatt 7

Genauigkeit: 15 Min.

Musterlösung:

9:15 Uhr / 21:15 Uhr

9:45 Uhr / 21:45 Uhr

2:30 Uhr / 14:30 Uhr

7:00 Uhr / 19:00 Uhr

11:15 Uhr / 23:15 Uhr

8:15 Uhr / 20:15 Uhr

4:15 Uhr / 16:15 Uhr

4:00 Uhr / 16:00 Uhr

6:45 Uhr / 18:45 Uhr