


Name \_\_\_\_\_ Datum \_\_\_\_\_ Klasse \_\_\_\_\_

© <http://aufgaben.schulkreis.de>

# Uhrzeit, Blatt 6









Genauigkeit: 15 Min.


Bestimme die Uhrzeiten.



8:45 Uhr

20:45 Uhr





# Lösung: Uhrzeit, Blatt 6

Genauigkeit: 15 Min.

Musterlösung:

8:45 Uhr / 20:45 Uhr

8:00 Uhr / 20:00 Uhr

5:30 Uhr / 17:30 Uhr

8:15 Uhr / 20:15 Uhr

6:00 Uhr / 18:00 Uhr

1:45 Uhr / 13:45 Uhr

1:45 Uhr / 13:45 Uhr

10:15 Uhr / 22:15 Uhr

6:00 Uhr / 18:00 Uhr