


Name _____ Datum _____ Klasse _____




© <http://aufgaben.schulkreis.de>

Uhrzeit, Blatt 4









Genauigkeit: 15 Min.


Bestimme die Uhrzeiten.



4:00 Uhr

16:00 Uhr





Lösung: Uhrzeit, Blatt 4

Genauigkeit: 15 Min.

Musterlösung:

4:00 Uhr / 16:00 Uhr

10:00 Uhr / 22:00 Uhr

1:45 Uhr / 13:45 Uhr

5:45 Uhr / 17:45 Uhr

4:30 Uhr / 16:30 Uhr

10:30 Uhr / 22:30 Uhr

10:45 Uhr / 22:45 Uhr

5:45 Uhr / 17:45 Uhr

4:45 Uhr / 16:45 Uhr