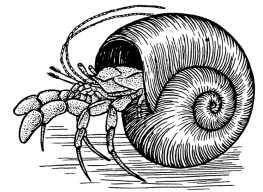


Name _____ Datum _____ Klasse _____




© <http://aufgaben.schulkreis.de>

Uhrzeit, Blatt 3


Genauigkeit: 15 Min.


Bestimme die Uhrzeiten.





0:45 Uhr


12:45 Uhr












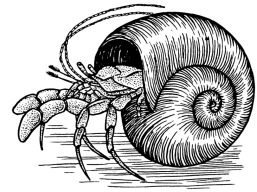








© <http://aufgaben.schulkreis.de>



Lösung: Uhrzeit, Blatt 3

Genauigkeit: 15 Min.

Musterlösung:

0:45 Uhr / 12:45 Uhr

11:15 Uhr / 23:15 Uhr

5:45 Uhr / 17:45 Uhr

6:15 Uhr / 18:15 Uhr

9:15 Uhr / 21:15 Uhr

3:00 Uhr / 15:00 Uhr

5:30 Uhr / 17:30 Uhr

11:00 Uhr / 23:00 Uhr

5:00 Uhr / 17:00 Uhr