


Name _____ Datum _____ Klasse _____

© <http://aufgaben.schulkreis.de>

Uhrzeit, Blatt 10




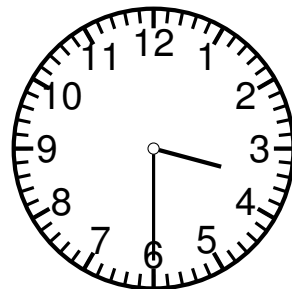




Genauigkeit: 15 Min.


Bestimme die Uhrzeiten.



9:15 Uhr

21:15 Uhr





Lösung: Uhrzeit, Blatt 10

Genauigkeit: 15 Min.

Musterlösung:

9:15 Uhr / 21:15 Uhr

5:00 Uhr / 17:00 Uhr

4:15 Uhr / 16:15 Uhr

11:15 Uhr / 23:15 Uhr

11:00 Uhr / 23:00 Uhr

3:30 Uhr / 15:30 Uhr

7:45 Uhr / 19:45 Uhr

10:00 Uhr / 22:00 Uhr

4:30 Uhr / 16:30 Uhr