


Name _____ Datum _____ Klasse _____

© <http://aufgaben.schulkreis.de>

Uhrzeit, Blatt 1


Genauigkeit: 15 Min.


Bestimme die Uhrzeiten.





4:45 Uhr


16:45 Uhr























Lösung: Uhrzeit, Blatt 1

Genauigkeit: 15 Min.

Musterlösung:

4:45 Uhr / 16:45 Uhr

4:45 Uhr / 16:45 Uhr

3:45 Uhr / 15:45 Uhr

5:30 Uhr / 17:30 Uhr

4:30 Uhr / 16:30 Uhr

0:00 Uhr / 12:00 Uhr

9:45 Uhr / 21:45 Uhr

9:00 Uhr / 21:00 Uhr

5:00 Uhr / 17:00 Uhr