


Name _____ Datum _____ Klasse _____

© <http://aufgaben.schulkreis.de>

Uhrzeit, Blatt 5









Genauigkeit: 15 Min.

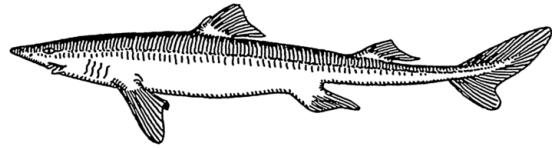
Bestimme die Uhrzeiten.



9:45 Uhr

21:45 Uhr





Lösung: Uhrzeit, Blatt 5

Genauigkeit: 15 Min.

Musterlösung:

9:45 Uhr / 21:45 Uhr

2:30 Uhr / 14:30 Uhr

2:15 Uhr / 14:15 Uhr

9:30 Uhr / 21:30 Uhr

2:45 Uhr / 14:45 Uhr

11:30 Uhr / 23:30 Uhr

9:15 Uhr / 21:15 Uhr

9:30 Uhr / 21:30 Uhr

5:45 Uhr / 17:45 Uhr