




Name _____ Datum _____ Klasse _____

© <http://aufgaben.schulkreis.de>

Uhrzeit, Blatt 2









Genauigkeit: 15 Min.

Bestimme die Uhrzeiten.



5:30 Uhr

17:30 Uhr





Lösung: Uhrzeit, Blatt 2

Genauigkeit: 15 Min.

Musterlösung:

5:30 Uhr / 17:30 Uhr

9:30 Uhr / 21:30 Uhr

0:00 Uhr / 12:00 Uhr

8:45 Uhr / 20:45 Uhr

9:45 Uhr / 21:45 Uhr

0:15 Uhr / 12:15 Uhr

8:15 Uhr / 20:15 Uhr

0:00 Uhr / 12:00 Uhr

3:15 Uhr / 15:15 Uhr