

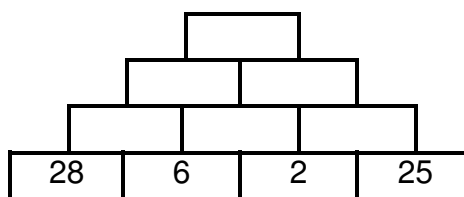
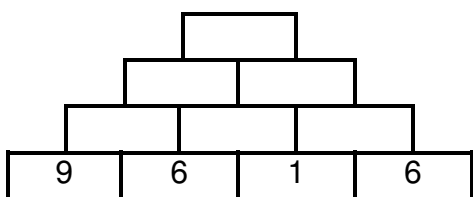
Name _____ Datum _____ Klasse _____

©<http://aufgaben.schulkreis.de>

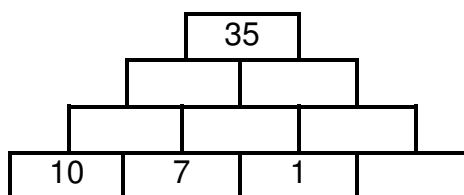
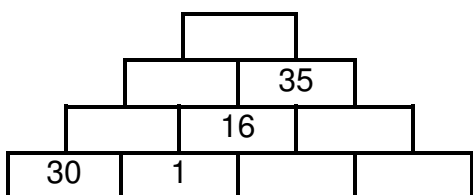
Zahlenmauern, Blatt 6

Rechnen bis 100 mit 4 Grundsteinen

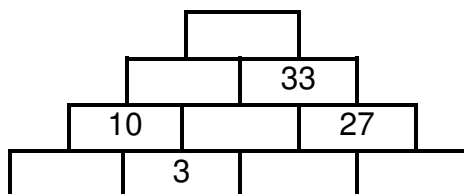
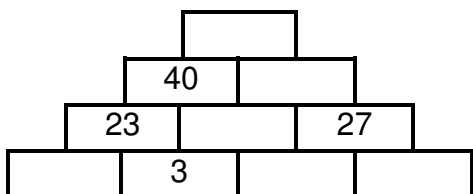
Aufgabe 1




Aufgabe 2



Aufgabe 3

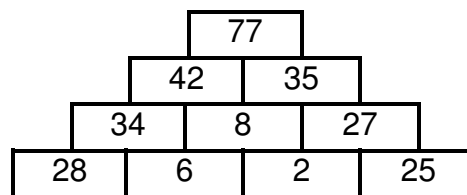
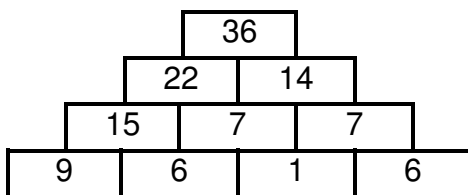




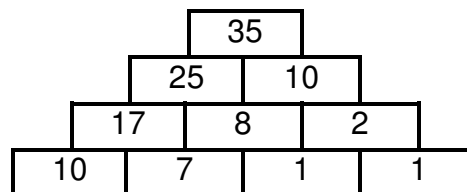
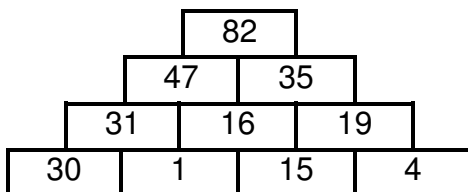
Lösung: Zahlenmauern, Blatt 6

Rechnen bis 100 mit 4 Grundsteinen

Aufgabe 1



Aufgabe 2



Aufgabe 3

