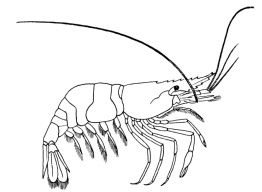


Name \_\_\_\_\_ Datum \_\_\_\_\_ Klasse \_\_\_\_\_

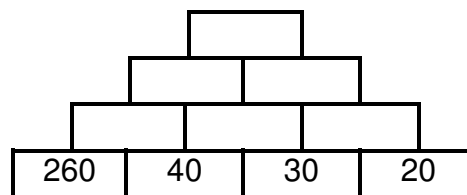
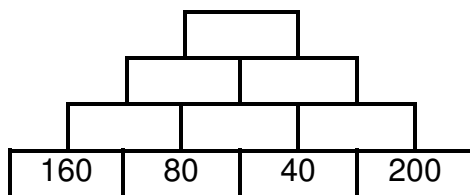


©<http://aufgaben.schulkreis.de>

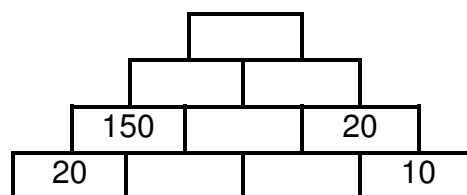
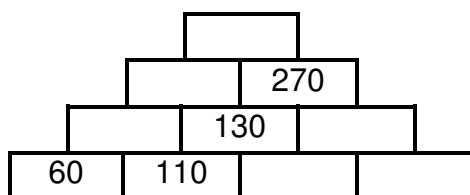
# Zahlenmauern, Blatt 7

## Rechnen bis 1000 mit 4 Grundsteinen

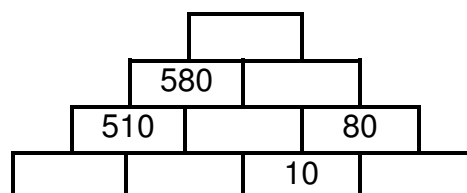
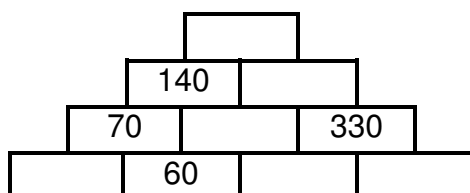
### Aufgabe 1

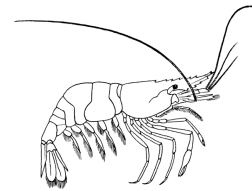


### Aufgabe 2



### Aufgabe 3

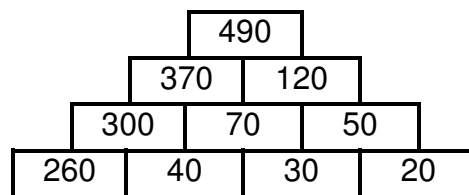
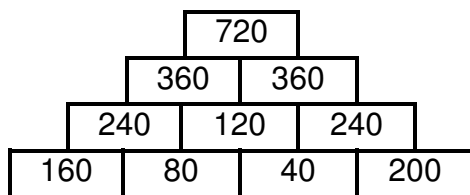




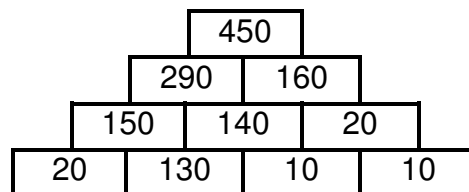
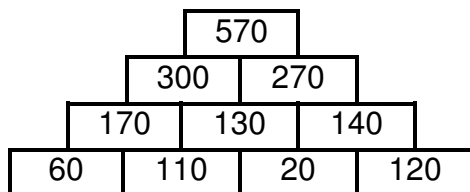
# Lösung: Zahlenmauern, Blatt 7

## Rechnen bis 1000 mit 4 Grundsteinen

### Aufgabe 1



### Aufgabe 2



### Aufgabe 3

